

DOWNLOAD PDF DOCUMENT



MANIPULATING SPECIAL RI...

DOWNLOAD DOCUMENT NOW

Updated: 11/06/2017

DISCLAIMER:

BE-FIRST.CO uses the following manipulating special right triangles answers book available for free PDF download which is also related with

MANIPULATING SPECIAL RIGHT TRIANGLES ANSWERS

People, who like to read eBooks and constantly use digital libraries, confess that sometimes they cannot download manipulating special right triangles answers or other necessary files because of bugs on the site. We can explain you why this happens. It is because of various hackers' attacks that cause troubles to users of digital libraries. We offer you to download manipulating special right triangles answers for free after registration. This action provides for free, easy and unlimited use of our library and access to manipulating special right triangles answers. It will not take much time - just follow the link below and start the registration. You have to answer simple questions to become a constant user of our site and download manipulating special right triangles answers if needed. When you pass the registration, you will get an access to our digital library where you will be able to find eBooks of all existing genres and fields - manipulating special right triangles answers, belles-lettres, scientific literature and so on.

DOWNLOAD NOW

DOWNLOAD PDF DOCUMENT

DOWNLOADED PDF DOCUMENT

MANIPULATING SPECIAL RI...

[LESSON 3 SPECIAL RIGHT TRIANGLES.NOTEBOOK](#)

Lesson3SpecialRightTriangles.notebook October03,2013 1 Lesson3SpecialRightTriangles.notebook October03,2013 2 ...

File name: Lesson 3 Special Right Triangles 30 60 90.pdf

[Download now or Read Online](#)

[MICROSOFT WORD - 7.3 WS.DOC](#)

Geometry Survey Name: 7.3 Worksheet Period: Special Right Triangles: 30 - 60 - 90Hypotenuse = 2 * Short LegLong Leg = Short Leg *Find the value of x and y in each triangle.1. 2. 3.4. 5. 6.7. 8. 9.Sketch the figure that is described. Then, find the requested measure.10. An equilateral triangle has a side length of 10 inches. Find the length of the triangles altitude.11. The altitude of an equilater...

File name: Special Right Triangles.pdf

[Download now or Read Online](#)

[GEOMETRY TEST ANSWERS KEY CURRICULUM PRESS](#)

Geometry Test Answers Key Curriculum Press pdfDOWNLOAD HEREDiscovering Geometry An Investigative Approachhttp cms cerritos edu uploads mallen Math 20070 20Worksheets DGPSA Ans pdf2008 Key Curriculum Press ANSWERS DG4PSA 894 ans qxd 11 1 06 10 37 AM Page 91 92 ANSWERS Discovering GeometryPractice Your Skills 2008 Key Curriculum PressPractice Your Skills with Answers - South Dade Senior Highhttp sds...

File name:

[Download now or Read Online](#)

[6-AREA OF REGULAR POLYGONS](#)

Kuta Software - Infinite Geometry Name Area of Regular Polygons Date Period Find the area of each regular polygon. Leave your answer in simplest form. 1) 2) 13.9 4 3 3 14.4 8 3) 4) 7.5 14.5 5.1 12 5) 6) 12 10 5 3 16.5 7) pentagon 8) triangle apothem = 7.3 apothem = 14 side = 10.6 side = 28 3J P2g0V1k27 jKsuNtjap zSjofWttwCaYrRek sL4LCCz.F R mA4luly 4rkiyghwhtosX XrseUsweFr0vFexdH.X 5 HMUaLdneF f...

File name: Area of Regular Polygons WS - no answers.pdf





















[Download now or Read Online](#)

DOWNLOADED PDF DOCUMENT

DOWNLOAD PDF DOCUMENT

Here below another book similar with:

MANIPULATING SPECIAL RI...

-  [manipulating special right triangles answers](#)
-  [special right triangle quiz answer](#)
-  [special operations executive outline history of the special operations executive](#)
-  [math 9th class chapter7 triangles](#)
-  [kutasoftware infinite geometry triangles and parallel](#)
-  [prentice hall drive right tenth edition answers](#)
-  [wrong but right answers](#)
-  [right triangle trigonometry answers](#)
-  [2016 manufacturing industry directory of search firms and recruiters job hunting get your resume in the right hands](#)
-  [the random right one xxakanexx](#)
-  [right now im small and i have a long time to grow](#)
-  [passages with right there questions](#)
-  [selecting right people for the job](#)
-  [everything in its right place by joseph almog](#)
-  [solution of linear algebra done right second edition](#)
-  [putin vs putin vladimir putin viewed from the right](#)
-  [the little woman 39 s always right](#)
-  [is fashion a woman s right hb pb price](#)
-  [hospitalityleisuretravel directory of search firms and recruiters job hunting get your resume in the right hands](#)
-  [iep goal bank special education](#)

DOWNLOAD PDF DOCUMENT