

# DOWNLOAD PDF DOCUMENT



## MODERN CHEMISTRY CHAPTE...

**DOWNLOAD DOCUMENT NOW**

**Updated:** 10/15/2017

---

**DISCLAIMER:**

BE-FIRST.CO uses the following modern chemistry chapter 7 test book available for free PDF download which is also related with

**MODERN CHEMISTRY CHAPTER 7 TEST**

Users who need modern chemistry chapter 7 test and other eBooks in PDF format can get a free access to our digital library. The only condition is registration. It doesn't mean that you need to pay for it. This procedure is also free. All you need is to follow the link below and answer simple questions. Then you will become our registered user and get an access to modern chemistry chapter 7 test and other eBooks of various genres and fields. You can download modern chemistry chapter 7 test as well as other files any time and on any device supporting PDF format. People often ask why registration is needed. The answer is clear - we have to ask our users to pass registration in order to preclude hackers' attracts. So, when you get an access to modern chemistry chapter 7 test, you can be sure that you will be able to use our digital library without any limitations. Pass the registration and download modern chemistry chapter 7 test now.

---

**DOWNLOAD NOW**

# DOWNLOAD PDF DOCUMENT

# DOWNLOAD PDF DOCUMENT

## MODERN CHEMISTRY CHAPTE...

### [EXAMVIEW - CHAPTER 14 TEST REVIEW- WILLIAMS.TST](#)

Name: Period: Date: K. Williams ID: A8th Grade Chapter 14 TEST REVIEW 1. Determine the volume of the cylinder. Use 3.14 for  $\pi$ . 2. Complete the table to identify the effect tripling the radius of a cylinder's base has on its volume. Cylinder radius Cylinder Area of Cylinder Height Cylinder Volume (cm<sup>3</sup>) r Base (cm) A  $\pi r^2$  (cm<sup>2</sup>) h (cm) V  $\pi r^2 h$  1 1 3 1 9 1 3. Identify the radius, diameter, and height ...

**File name:** ExamView - Chapter 14 Test Review- Williams.pdf  
[Download now or Read Online](#)

### [MICROSOFT WORD - CHAPTER 2 TEST REVIEW ANSWERS.DOCX](#)

Honors Geometry Chapter 2 Test Review Question Answers 1. Given: BA  $\angle A$   $(51 - x) + (y + 9) = 180$  Find: m $\angle$  MAT  $y = 120 + x$   $(y + 9) + (x + y) = 90$  B  $x + 2y = 81$   $x + 2(120 + x) = 81$   $x + 240 + 2x = 81$   $3x = -159$  M  $51 - x + y + 9 = 180$  N  $x + y = 120 + (-53) = 67$   $m\angle$  MAT =  $180 - (x + y) = 180 - 67 = 113$  2. A certain angle is 39 less than 2 times its complement. Find its supplement.  $x = 2(90 - x) - 39$

**File name:** Chapter 2 Test Review Answers.pdf  
[Download now or Read Online](#)

### [MICROSOFT WORD - CHAPTER 11 TEST REVIEW QUESTION ANSWERS.DOCX](#)

Honors Geometry Chapter 11 Test Review Question Answers 1. Find the area of an equilateral triangle that has sides that measure 8 7 . s  $2 \sqrt{3}$  A Equ. =  $\frac{1}{2} (8 7) (2 \sqrt{3}) = 4 (8 7) \sqrt{3} = 4 (112 3) = 448 3$  2. A rotor of a Wankel automotive engine has the geometric shape shown. The center of each arc is the opposite vertex of the equilateral triangle. a. Find the figure's area a.  $A = A_{\text{triangle}} + 3(A_{\text{segment}})$  b. Find the figur...

**File name:** Chapter 11 Test Review Question Answers.pdf  
[Download now or Read Online](#)

### [IB CHAPTER 8 TEST FORM 2A DO NOT WRITE ON TEST](#)

For any credit show all work on a separate sheet of paper for all problems. 13.14. IB Chapter 8 Test Free Response Name: Date; Per: Answer each question on a separate sheet of paper. For each problem do the following: a. Copy or draw a figure. Mark the figure up with the given information. b. Show all calculations. c. Make sure your final answer has the correct units. 1. 2. 3. 4. 5. 6. Bonus: a. b. ...

**File name:** Chapter 8 Test Form 2A including Free Response IB.pdf  
[Download now or Read Online](#)





















# DOWNLOAD PDF DOCUMENT

# DOWNLOAD PDF DOCUMENT

Here below another book similar with:

## MODERN CHEMISTRY CHAPTE...

---

-  [modern chemistry chapter 7 test](#)
-  [modern chemistry chapter test answers](#)
-  [american vision modern times chapter 20 test](#)
-  [chemistry chapter 12 test answers](#)
-  [chapter quiz test bank chemistry mcgraw hill](#)
-  [modern allene chemistry](#)
-  [modern chemistry review carbon and hydrocarbons answer](#)
-  [modern chemistry interactive reader answer key](#)
-  [holt mcdougal modern chemistry vocabulary](#)
-  [holt modern chemistry answer key exam](#)
-  [modern chemistry liquids and solids review answers](#)
-  [modern biology holt rinehart and winston chapter 2](#)
-  [holt chemistry nuclear chemistry answers](#)
-  [pearson chemistry chemistry study guide](#)
-  [prentice hall chemistry workbook answers chapter 11](#)
-  [chemistry matter and change chapter 18 answers](#)
-  [chemistry guided reading and study workbook answers chapter 4](#)
-  [chemistry matter change chapter 16 assessment answer key](#)
-  [chemistry chapter 5 answers](#)
-  [glencoe chemistry chapter 13 assessment answers](#)

# DOWNLOAD PDF DOCUMENT